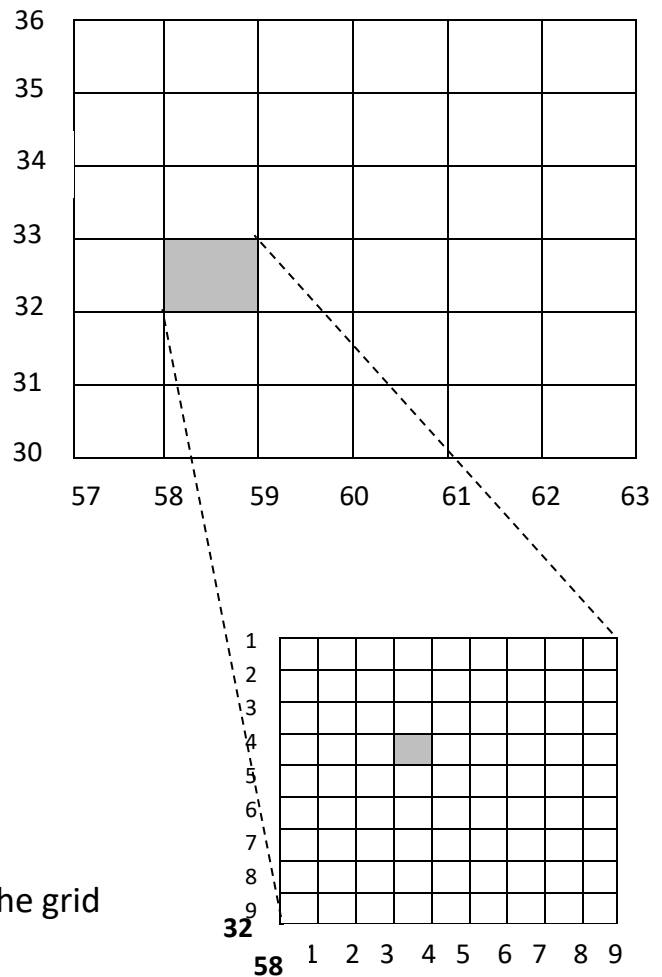


Grid References

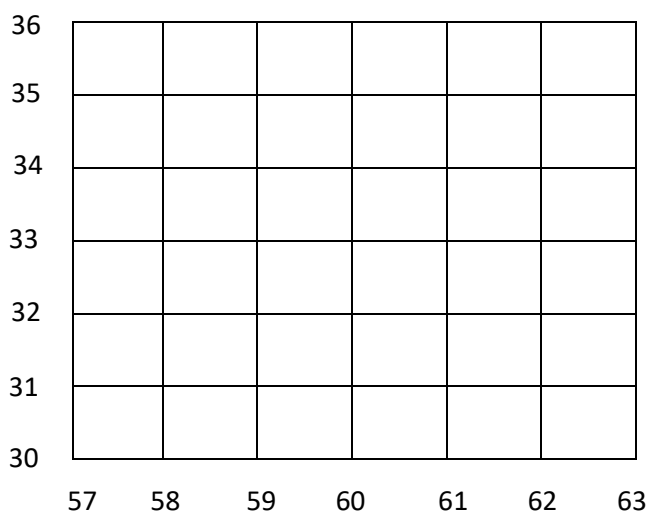
There are two main types of grid references:

- **Four-Figure** – This indicates a single km square on an OS map
- **Six-Figure** – This indicates a point within a square

To find these grid-references you must read along the corridor and then up the stairs. This gives you the bottom left corner of the grid square/point you're trying to find



Add the letters in the correct place on the grid below:



A – 5833

B – 6131

C – 5730

D – 5931

E – 6132

Write the four-figure grid references for the squares labelled below:

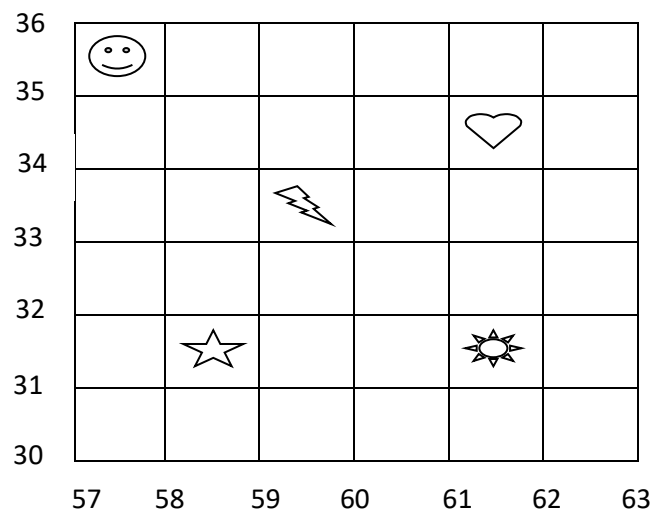
_____ ☺

_____ ♥

_____ ⚡

_____ ☀

_____ ★



Write down the six-figure grid reference for the points below and add the correct shapes to their points:

