


## Telling the time!

Complete the following tasks before. If you find it easy, have a go at the challenge tasks.

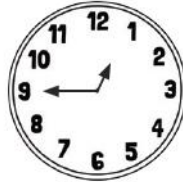
Write the time shown on each clock.



\_\_\_\_\_



\_\_\_\_\_



\_\_\_\_\_



\_\_\_\_\_



\_\_\_\_\_



\_\_\_\_\_



\_\_\_\_\_



\_\_\_\_\_



\_\_\_\_\_




\_\_\_\_\_



\_\_\_\_\_



\_\_\_\_\_



\_\_\_\_\_



\_\_\_\_\_



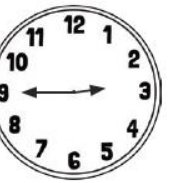
\_\_\_\_\_



\_\_\_\_\_



\_\_\_\_\_



\_\_\_\_\_



\_\_\_\_\_



\_\_\_\_\_



\_\_\_\_\_



\_\_\_\_\_



\_\_\_\_\_



\_\_\_\_\_

Task 2: Writing the time on the clocks. (O clock, half past, quarter past and quarter to).

Draw the time on each clock.



9 o'clock



half past 3



6 o'clock



half past 4



quarter past 2



half past 1



quarter to 11



11 o'clock



half past 2



5 o'clock



quarter past 1



half past 5



quarter to 8



3 o'clock



half past 6



quarter to 1



half past 7



quarter past 8



10 o'clock



half past 12



quarter past 11



quarter to 4



half past 6



2 o'clock

Challenge- Can you tell the time to the **nearest 5 minutes**?



E.g. 10 minutes past 2.

---



Mastery Challenges:

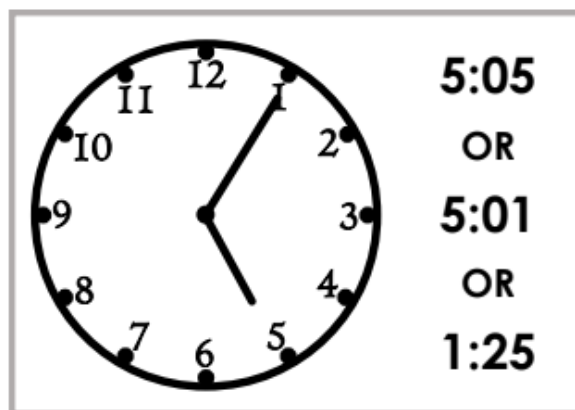
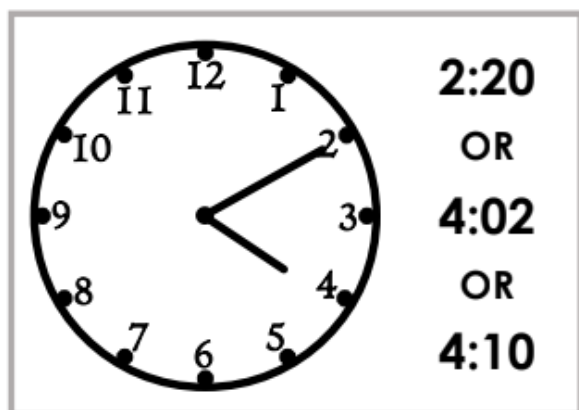
Explain the mistake



The time is  
1 o'clock

Which answer?

Circle the correct time.



Explain the mistakes

