


Year 4 Maths Activity Mat

4

Section 1

Write the 24-hour digital time to match the time (pm) shown on the clock.



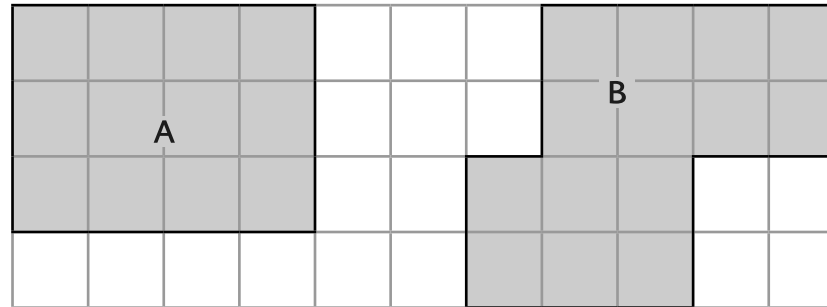
Section 2

Calculate the following using the partitioning method:

$$84 \times 6 =$$

Section 5

Find the perimeter of A and B. (Each square is 1 cm x 1 cm)

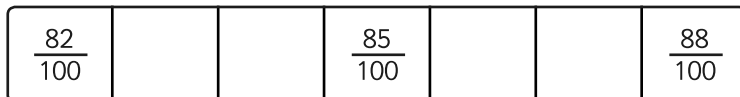


A =

B =

Section 3

Fill in the missing fractions to complete this sequence.



Section 6

Use the following signs to make these equations true: \leq \geq

$$6.74 \quad \square \quad 6.73$$

$$2.55 \quad \square \quad 2.49$$

Section 7

Ben's mum gave him £28 for his birthday.

His Dad gave him a three quarters of this amount extra.

How much money was Ben given altogether?

Section 4

On a computer game called Big Foot's Quest, you need 2750 points to reach Level 3. You need another 1550 points to reach Level 4. How many points do you need altogether to reach Level 4?

Section 8

A shop sells three types of sunglasses. What is the difference in price between the most expensive and least expensive sunglasses?




Year 4 Maths Activity Mat: 4

Answers

Section 1

Write the 24-hour digital time to match the time (pm) shown on the clock.



21.23

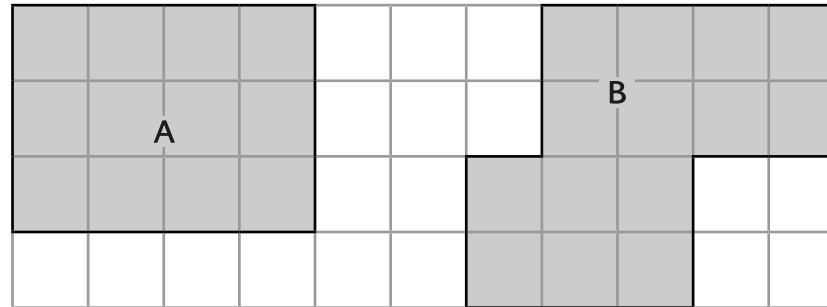
Section 2

Calculate the following using the partitioning method:

$$84 \times 6 = 504$$

Section 5

Find the perimeter of A and B. (Each square is 1 cm x 1 cm)



A = 14cm

B = 18cm

Section 3

Fill in the missing fractions to complete this sequence.

$\frac{82}{100}$	$\frac{83}{100}$	$\frac{84}{100}$	$\frac{85}{100}$	$\frac{86}{100}$	$\frac{87}{100}$	$\frac{88}{100}$
------------------	------------------	------------------	------------------	------------------	------------------	------------------

Section 6

Use the following signs to make these equations true: < or >

$$6.74 > 6.73$$

$$2.55 > 2.49$$

Section 7

Ben's mum gave him £28 for his birthday.

His Dad gave him a three quarters of this amount extra.

How much money was Ben given altogether?

£49

Section 4

On a computer game called Big Foot's Quest, you need 2750 points to reach Level 3. You need another 1550 points to reach Level 4. How many points do you need altogether to reach Level 4?

4300

Section 8

A shop sells three types of sunglasses. What is the difference in price between the most expensive and least expensive sunglasses?



£4.69



£2.99



£5.85

£2.86