

# Year 4 Maths Activity Mat

3

## Section 1

Write this number:

Four thousand, three hundred and six

In the number 23 648, what place value does the 3 represent?

## Section 2

Calculate the following in your head:

$55 + 60 =$

$45 + 36 =$

$52 - 22 =$

$21 - 12 =$

## Section 3

Calculate:

$2.3 \times 100 =$

$5.1 \times 100 =$

$231 \div 100 =$

$622 \div 100 =$

## Section 4

Round to the nearest whole number:

$2.3 \rightarrow$

$4.6 \rightarrow$

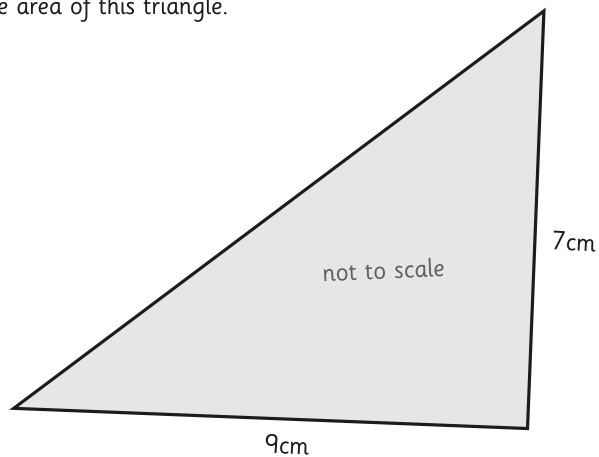
$5.9 \rightarrow$

## Section 5

Tickets to the skating rink cost £17 for children and £23 for adults. What is the total cost for 2 adults and 3 children?

## Section 6

Find the area of this triangle.




## Section 7

Order these from smallest to largest:

8.8    8.3    8.9    8.5    8.1

|  |  |  |  |  |
|--|--|--|--|--|
|  |  |  |  |  |
|--|--|--|--|--|

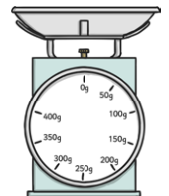


## Section 8

Convert these weights to grams or kilograms:

$4500g =$

$5.2kg =$



# Year 4 Maths Activity Mat: 3

## Answers

### Section 1

Write this number:

Four thousand, three hundred and six

**4306**

In the number 23 648, what place value does the 3 represent?

**3000**

### Section 2

Calculate the following in your head:

$55 + 60 = \mathbf{115}$

$45 + 36 = \mathbf{81}$

$52 - 22 = \mathbf{30}$

$21 - 12 = \mathbf{9}$

### Section 3

Calculate:

$2.3 \times 100 = \mathbf{230}$

$5.1 \times 100 = \mathbf{510}$

$231 \div 100 = \mathbf{2.31}$

$622 \div 100 = \mathbf{6.22}$

### Section 4

Round to the nearest whole number:

$2.3 \rightarrow \mathbf{2}$

$4.6 \rightarrow \mathbf{5}$

$5.9 \rightarrow \mathbf{6}$

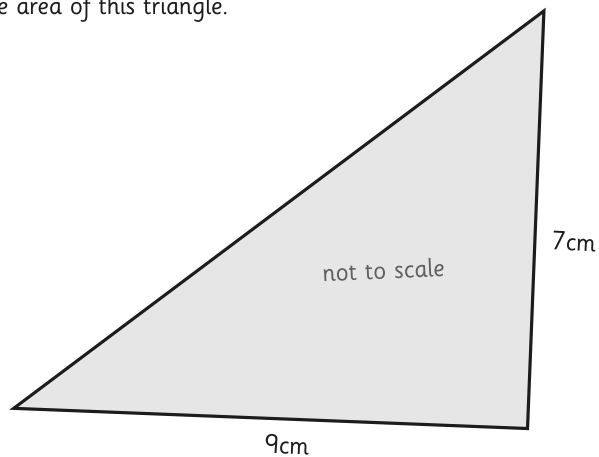
### Section 5

Tickets to the skating rink cost £17 for children and £23 for adults. What is the total cost for 2 adults and 3 children?

**£97**

### Section 6

Find the area of this triangle.



**31.5cm<sup>2</sup>**

### Section 7

Order these from smallest to largest:

8.8    8.3    8.9    8.5    8.1


**8.1**

**8.3**

**8.5**

**8.8**

**8.9**



### Section 8

Convert these weights to grams or kilograms:

$4500\text{g} = \mathbf{4.5\text{kg}}$

$5.2\text{kg} = \mathbf{5200\text{g}}$

