

Telling the Time



Task 1: Write the times shown on the clocks to the hour and half past the hour.

Tell the Time: Writing the Time

Write the time shown on each clock.

























Task 2: Write the times on the clocks to the hour and half past the hour.



9 o'clock



half past 3



5 o'clock



1 o'clock



half past 7



half past 8



10 o'clock



half past 12




11 o'clock



half past 4



half past 6



2 o'clock

Challenge- Can you show the time to **quarter past the hour**?

Draw the time on each clock.



quarter to 9



quarter to 3



quarter to 5



quarter to 1



quarter to 7



quarter to 8

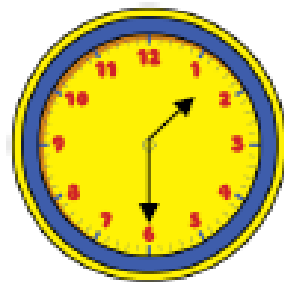


quarter to 10




quarter to 12

Mastery Question:



The time is 6 past 1



Amy

Can you spot Amy's mistake?